










Name \_\_\_\_\_ Date \_\_\_\_\_

Can you count the Mr Men and write how many there are in each box?



Can you count up to 20 objects? Can you count at least 20 objects and know that the last number you say is how many there are altogether?

Name \_\_\_\_\_ Date \_\_\_\_\_




Can you count the Mr Men and write how many there are in each box?

	<input type="text"/>
	<input type="text"/>
	<input type="text"/>
	<input type="text"/>
	<input type="text"/>
	<input type="text"/>
	<input type="text"/>
	<input type="text"/>
	<input type="text"/>
	<input type="text"/>

Can you count up to 20 objects? Can you count at least 20 objects and know that the last number you say is how many there are altogether?

Name \_\_\_\_\_ Date \_\_\_\_\_




Can you count the Mr Men and write how many there are in each box?

	<input type="text"/>
	<input type="text"/>
	<input type="text"/>
	<input type="text"/>
	<input type="text"/>
	<input type="text"/>
	<input type="text"/>
	<input type="text"/>
	<input type="text"/>

Can you count up to 20 objects? Can you count at least 20 objects and know that the last number you say is how many there are altogether?

Name \_\_\_\_\_ Date \_\_\_\_\_



Can you count the Mr Men and write how many there are in each box?

A row of 10 Mr. Men figures, each formed by a red 'X' inside a triangle.	<input type="text"/>
--	----------------------

A row of 8 Mr. Men figures, each formed by a red 'X' inside a triangle.	<input type="text"/>
---	----------------------

A row of 12 Mr. Men figures, each formed by a red 'X' inside a triangle.	<input type="text"/>
--	----------------------

A row of 7 Mr. Men figures, each formed by a red 'X' inside a triangle.	<input type="text"/>
---	----------------------

A row of 15 Mr. Men figures, each formed by a red 'X' inside a triangle.	<input type="text"/>
--	----------------------

A row of 10 Mr. Men figures, each formed by a red 'X' inside a triangle.	<input type="text"/>
--	----------------------

A row of 14 Mr. Men figures, each formed by a red 'X' inside a triangle.	<input type="text"/>
--	----------------------

A row of 12 Mr. Men figures, each formed by a red 'X' inside a triangle.	<input type="text"/>
--	----------------------

A row of 10 Mr. Men figures, each formed by a red 'X' inside a triangle.	<input type="text"/>
--	----------------------

A row of 12 Mr. Men figures, each formed by a red 'X' inside a triangle.	<input type="text"/>
--	----------------------

Name \_\_\_\_\_ Date \_\_\_\_\_

Can you count up to 20 objects? Can you count at least 20 objects and know that the last number you say is how many there are altogether?